



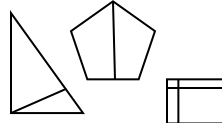





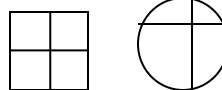




Grade 1 going into Grade 2 Summer Math Calendar

~ July 2015~

Sun	Mon	Tue	Wed	Thu	Fri	Sat
<p>Welcome to the summer math calendar for students entering Second Grade. This calendar is recommended, but not required. Reviewing the learned skills will maintain the foundation for math success at the next grade level. The design of the activities on this calendar is meant to support instruction in the new curriculum in both its content and presentation. Therefore the activities are not to be done as independent problems, but to be worked on with a parent, guardian or older brother or sister. Talking about the problem is an important part of completing each activity. On the backside of this calendar are recommended math websites for more reinforcement of math concepts and computation.</p>			<p>1 Fill in the missing numbers.</p> <p>46, ____, ____, 49, ____</p> <p>____, 25, ____, 29, 31</p>	<p>2 Drake had 18 crayons. He gave 2 crayons to Nicky. How many crayons does he have now?</p> <p>_____</p>	<p>3 Identify the number that makes the equation true.</p> <p>$27 + 4 = \underline{\hspace{2cm}}$</p> <p>15 47 31</p>	<p>4 Independence Day</p> 
<p>5 Write the numbers that are 10 more and 10 less.</p> <div> <div>10 less</div> <div>10 more</div> </div> <p>____ 15 ____</p> <p>____ 36 ____</p>	<p>6 Jane had 3 pens. Chris gave her some more pens. Then Jane had 9 pens. How many pens did Chris give Jane?</p> <p>_____</p>	<p>7 Determine if the equation is true or false.</p> <p>$6 + 8 = 16$</p> <p>True False</p> <p>Explain your thinking.</p>	<p>8 Draw a square.</p> 	<p>9 Jane baked 16 cakes. She baked 7 fewer cakes than Serene. How many cakes did Serene bake?</p> <p>_____</p> 	<p>10 Write the correct time.</p> 	<p>11 Dave saved three nickels, one quarter and two dimes. How much money did he save altogether?</p> <p>_____</p>
<p>12 Circle the shape with two equal shares. Explain your thinking.</p> 	<p>13 A  has 2 wheels. A  has 4 wheels.</p> <p>How many wheels are on 1 bike and 2 wagons?</p> <p>_____</p>	<p>14 Write four related facts using the three numbers [7, 4, 11]</p> <p>____ + ____ = ____</p> <p>____ + ____ = ____</p> <p>____ - ____ = ____</p> <p>____ - ____ = ____</p>	<p>15 List the objects from 1 (shortest) to 3 (longest)</p> 	<p>16 Solve for the unknown.</p> <p>____ + 7 = 14</p> <p>18 - ____ = 8</p>	<p>17 Identify two attributes that could be used to describe this shape.</p>  <p>_____</p> <p>_____</p>	<p>18 Harris has 6 stickers. He buys 3 more stickers every day. How many days does it take him to collect 18 stickers altogether?</p> <p>_____</p>
<p>19 Draw a triangle.</p> 	<p>20 Circle the number that is 10 less than 47.</p> <p>56 37 57 32</p>	<p>21 Write <, > or = in the blank below.</p> <p>45 ____ 40 + 5</p> <p>25 ____ 35 - 7</p>	<p>22 Write an addition word problem for another family member to solve.</p>	<p>23 Circle the shape partitioned into 4 equal parts. Explain.</p> 	<p>24 Complete the equations.</p> <p>$8 + 6 =$</p> <p>$13 - 4 =$</p> <p>$10 + 4 =$</p> <p>$18 - 5 =$</p>	<p>25 There are 15 scarves. 6 of them are green and the rest are yellow. How many yellow scarves are there?</p> <p>_____</p> 
<p>26 Solve for the unknown.</p> <p>____ + 4 = 12</p> <p>20 - ____ = 6</p>	<p>27 Rope P is 14 units long. Rope Q is 8 units shorter than rope P.</p> <p>How long is rope Q?</p> <p>_____</p> <p>What is the total length of rope P and rope Q?</p> <p>_____</p>	<p>28 I wake up at</p> 	<p>29 Write <, > or = in the blank below.</p> <p>15 ____ 32</p> <p>50 + 3 ____ 60 - 7</p>	<p>30 Write a subtraction word problem for another family member to solve</p>	<p>31 CHALLENGE Yesterday was Monday. What is four days after tomorrow? Explain your thinking.</p>	

<http://www.allmath.com/>

This site has flash cards and links to other sites for games, math humor, worksheets, math help and more.

<http://www.aplusmath.com>

This site has basic facts flash cards and a game room, worksheets, multiplication table practice and more.

<http://www.mathfactcafe.com>

This site has a pencil next to pre-made cards so kids can do the facts and have the computer check them. Kids can print them out and also put in their own numbers and make their own worksheets.

<http://www.funbrain.com>

This site has easier to harder addition and subtraction computation and problem solving. It also has language and grammar skills activities

<http://www.dositey.com/>

This site is a lot of fun and is good for 2 digit addition with and without regrouping

<http://www.24game.com>

This site has math games using basic operations

<http://www.coolmath4kids.com>

This site has a wide range of topics and will give you step-by-step instructions.

<http://www.abc.net.au/countusin/games>

Each game is designed to help kids understand basic concepts in math. This site has a variety of math games i.e. volume, length, halves, chance, numbers, time, sorting, subtraction, and addition. It is better for students of the primary grades.

<http://www.learningplanet.com>

This site has games by grade level but with advertisement and a subscription. There are some free games.

<http://www.gamequarium.com>

This site has math activities for K-6.

<http://www.SETGame.com>

This is a card game to build students' visual thinking and pattern skills in math. Commercial, but does have some great free puzzles.

<http://www.math.com>

Good resource of how to do problems

<http://www.mathcats.com>

This is an interactive fun site

<http://www.spikesgamezone.com>

Lots of math games

<http://www.funschool.com>

This site has games, but also commercial advertising

<http://www.figurethis.org>

This site gives you ideas for fun hands-on math activities. Good for upper grades

<http://www.kidsites.com>

List of sites for math as well as other subjects.

<http://timezattack.com>

FREE home version for practicing multiplication facts (also new versions for division, addition, and subtraction!)

<http://abcya.com>

Loads of math games for K-5 as well as games for reading and language arts