

The semester A examination for Honors Algebra 2 will consist of two parts. Part 1 will be selected response on which a calculator will not be allowed. Part 2 will be short answer on which a calculator will be allowed.

The following symbol applies to this review:



Indicates that a student should be able to complete this item with or without a calculator.

- If a calculator is used to find points on a graph, the appropriate calculator function (i.e. zero, intersect, minimum or maximum) should be used. The trace function should not be used.
- Decimal approximations must be accurate to three places after the decimal point.
- Unless otherwise specified, the domain of any function f is assumed to be the set of all real numbers x for which $f(x)$ is a real number.
- $[x]$ represents the greatest integer function.

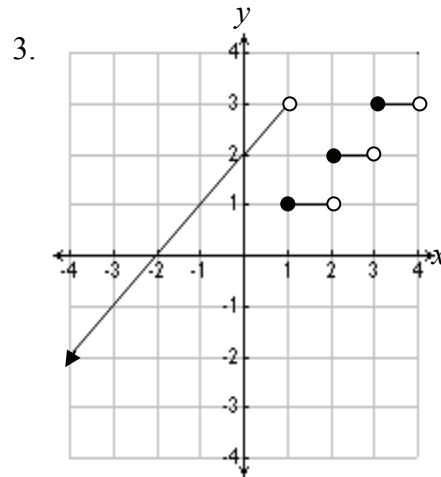
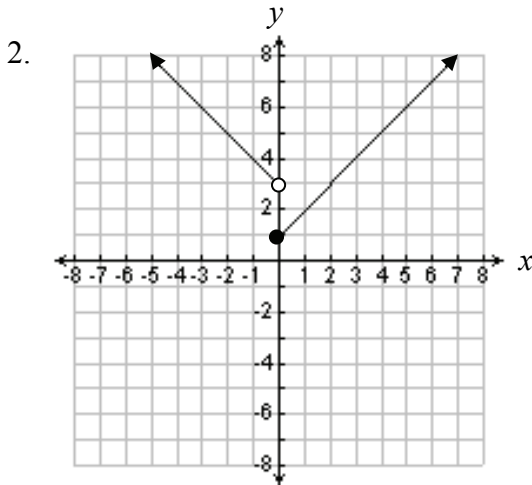
No formulas will be provided in the examination booklet.



1. Sketch the graph of $f(x) = \begin{cases} x+1, & \text{if } x \leq 0 \\ 3-4x, & \text{if } x > 0 \end{cases}$



- For items 2 and 3, write the functions represented by the graphs below.



4. When ordering items from a catalog, the buyer has the option of having items gift-wrapped. The shipping charge for every order is \$12. In addition, if 5 items or less are wrapped, the charge is \$5.00 per item wrapped. If more than 5 items and less than 10 items are wrapped, the charge is \$4.50 per item wrapped. If 10 items or more are wrapped, the charge is \$3.00 per item wrapped.
- Write a piece-wise function for the total charge of gift-wrapping x items, including the shipping charge.
 - If the total charge, plus shipping is exactly \$51, how many items were wrapped?



5. Let $f(x) = 3|x + 2| - 4$
- Sketch the graph of $f(x)$.
 - What is the domain of $f(x)$?
 - What is the range of $f(x)$?
 - What is the vertex of the graph of $f(x)$?
 - What is the axis of symmetry of the graph of $f(x)$?
 - What is the minimum value of $f(x)$?
 - Is the function $f(x)$ continuous?

For items 6 through 13, use the following functions:

$$f(x) = x - 3$$

$$g(x) = 2x - 8$$

$$h(x) = x^2 - 2$$

Evaluate.



6. $f(g(3))$



7. $h(f(-7))$

Perform the following operations.



8. $f(x) + g(x)$



9. $f(x) - g(x)$



10. $f(x) \cdot g(x)$



11a. $\frac{f(x)}{g(x)}$ 11b. What is the domain of the function $\frac{f(x)}{g(x)}$?



12. $g(h(x))$



13. $h(f(x))$



14. If $f(x) = \sqrt{x+8}$ and $g(x) = 4x$,

a. What is the domain of $f(g(x))$?b. What is the domain of $g(f(x))$?

For items 15 through 18, state whether the function is one to one.

15. $f(x) = 2x - 5$

16. $f(x) = -x^2$

17. $f(x) = |x|$

18. $f(x) = x^3 - 9x$

19. Are $f(x) = 7x - 6$ and $g(x) = \frac{x+6}{7}$ inverse functions? Verify your answer algebraically.20. If $f(x) = \frac{1}{3}x + 5$, which of the following represents the inverse function, $f^{-1}(x)$?

A $f^{-1}(x) = -\frac{1}{3}x - 5$

B $f^{-1}(x) = 3x - \frac{1}{5}$

C $f^{-1}(x) = 3x - 5$

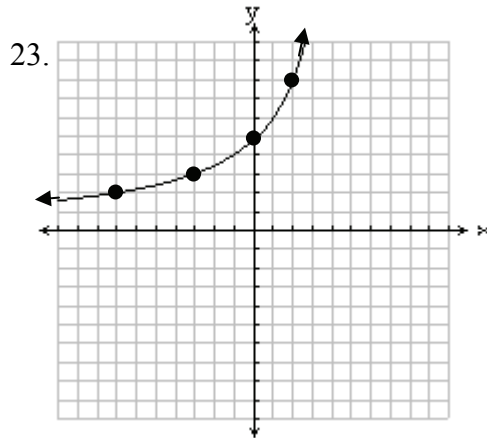
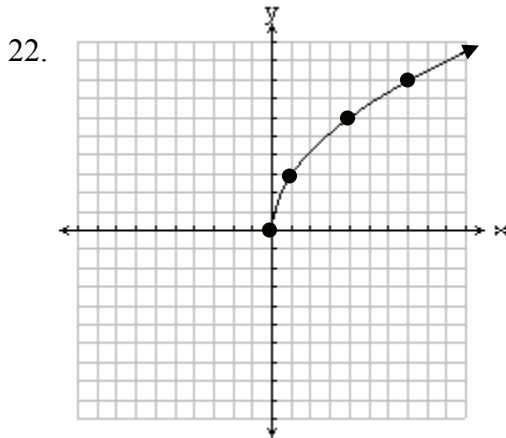
D $f^{-1}(x) = 3x - 15$



21. If $g(x) = 9x - 10$, determine the inverse function, $g^{-1}(x)$.



For items 22 and 23, for each function graphed below, sketch the inverse function.



24. Let $f(x) = |x + 3| + 4$. What modification of the domain of $f(x)$ results in its inverse, $f^{-1}(x)$, being a function?

For items 25 and 26, let $f(x) = |x - 2|$. Describe the transformations of $f(x)$ that will produce the graphs of the following functions.



25. $g(x) = |x| + 1$



26. $h(x) = 5|x - 3| - 9$

For items 27 through 32, use the following matrices.

$$A = \begin{bmatrix} 4 & 2 \\ 5 & -3 \end{bmatrix} \quad B = \begin{bmatrix} 7 & 1 & 9 \\ 8 & 5 & 3 \end{bmatrix} \quad C = \begin{bmatrix} 4 & x \\ 10 & 15 \end{bmatrix} \quad D = \begin{bmatrix} 1 & 5 & 6 & 3 & 1 \\ 9 & 7 & 3 & 4 & 0 \\ 4 & 2 & 3 & 1 & 8 \end{bmatrix}$$



27. What are the dimensions of the product matrix BD ?

A 2×5

B 5×2

C 5×3

D 3×5



28. Suppose there exists a matrix E such that the product matrix BE has 2 rows and 7 columns. What are the dimensions of matrix E ?



29. If $AB = \begin{bmatrix} 44 & y & 42 \\ 11 & -10 & 36 \end{bmatrix}$, what is the value of y ?



30. Determine the value of x in matrix C such that $AC = \begin{bmatrix} 36 & 58 \\ -10 & -10 \end{bmatrix}$



31. For what value of x is the determinant of matrix C equal to 15?



32. For what value of x will matrix C not have an inverse matrix?

A -6

B 0

C 6

D Matrix C will have an inverse matrix for every value of x .

33. Barry’s Burgers offers three different types of burgers at three different prices. The types are the Hamburger, the Cheeseburger, and the BarryBurger.

Jill and her friends visited Barry’s Burgers three times.

One time, 3 Hamburgers, 5 Cheeseburgers, and 6 BarryBurgers cost \$25.24.
 Another time, 2 Hamburgers, 7 Cheeseburgers and 5 BarryBurgers cost \$25.68.
 The last time, 4 Hamburgers, 4 Cheeseburgers, and 7 BarryBurgers cost \$26.59.

- Write a system of equations that represents the situation. Be sure to define the variables.
- Represent the system as a matrix equation.
- Determine the cost of each type of burger.

34. For item 34, grid in and bubble your answer in the grid provided

34

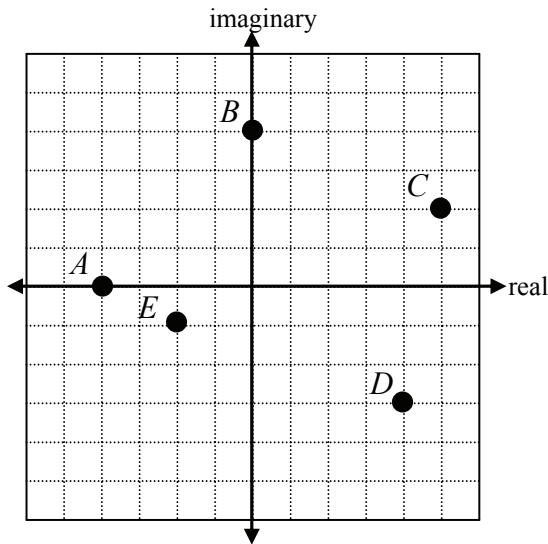
The volume of a gift box is given by the function $V(h) = 4h^3 - 32h^2 + 60h$ where h represents the height of the box.
 The domain of the function is $0 < h \leq 3$.

What is the height (h) of the box with maximum volume?

	7	7	
	0	0	0
1	1	1	1
2	2	2	2
3	3	3	3
4	4	4	4
5	5	5	5
6	6	6	6
7	7	7	7
8	8	8	8
9	9	9	9



35. Write the complex number represented by points A – E on the graph below.





36. Identify each of the following as real, pure imaginary, and/or complex.

- a. $\sqrt{3}$
- b. $\sqrt{-9}$
- c. $5 + 2i$

For items 37 through 44, perform the indicated operations.



37. $(3 + 2i) + (5 - 7i)$



38. $(5 - 6i)(1 - i)$



39. $(8 - 2i)(8 + 2i)$



40. $(2 - 7i)^2$



41. $\frac{7i}{2 - i}$



42. $\frac{2 + 7i}{1 + 6i}$



43. $|2 - 3i|$



44. $|5 + 12i|$



For items 45 and 46, fill in the blank with the number that completes the square.

45. $x^2 - 6x + \underline{\hspace{2cm}}$

46. $x^2 + 10x + \underline{\hspace{2cm}}$

47. Describe the relationship between the discriminant $b^2 - 4ac$ and the nature of the roots (zeros) of the quadratic equation $ax^2 + bx + c = 0$.

For items 48 and 49, solve for all values of x .



48. $x^2 - 3x + 11 = 0$



49. $3x^2 + x + 2 = 0$

For items 50a through 50c, grid in and bubble your answers in the grids provided.

50. An arrow is shot from a height of 32 feet with an initial velocity of 56 ft/sec. The equation of the height $h(t)$ (in feet) of the arrow at time t (in seconds) is $h(t) = -16t^2 + 56t + 32$.

- a. After how many seconds will the arrow hit the ground?
- b. How many feet high will the arrow be at $t = 1.5$ seconds?
- c. What is the maximum height, in feet, that the arrow will reach?

50a

	7	7	
	0	0	0
1	1	1	1
2	2	2	2
3	3	3	3
4	4	4	4
5	5	5	5
6	6	6	6
7	7	7	7
8	8	8	8
9	9	9	9

50b

	7	7	
	0	0	0
1	1	1	1
2	2	2	2
3	3	3	3
4	4	4	4
5	5	5	5
6	6	6	6
7	7	7	7
8	8	8	8
9	9	9	9

50c

	7	7	
	0	0	0
1	1	1	1
2	2	2	2
3	3	3	3
4	4	4	4
5	5	5	5
6	6	6	6
7	7	7	7
8	8	8	8
9	9	9	9



51. If $f(x) = -x^2$, on what interval of x -values is $f(x)$ decreasing?



52. What are the right- and left-end behaviors of the function $f(x) = x^3 - 4x - 8$?

As $x \rightarrow \infty$, $f(x) \rightarrow$ _____

As $x \rightarrow -\infty$, $f(x) \rightarrow$ _____



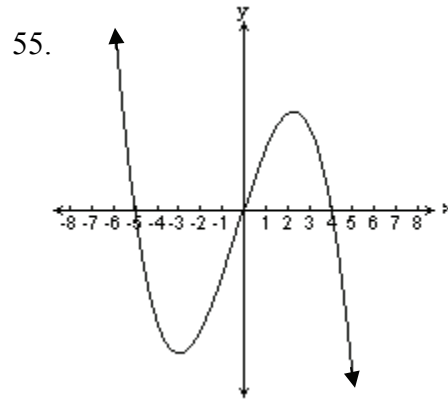
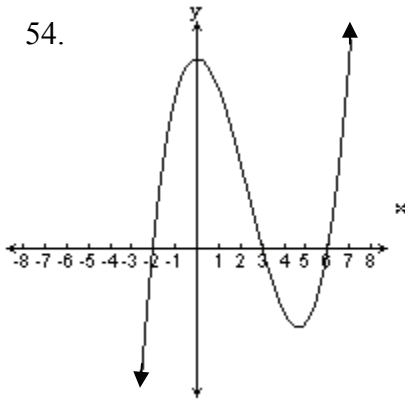
53. What are the right- and left-end behaviors of the function $f(x) = -x^4 - 4x^3 - 4$?

As $x \rightarrow \infty$, $f(x) \rightarrow$ _____

As $x \rightarrow -\infty$, $f(x) \rightarrow$ _____



For items 54 and 55, write an equation in factored form for the graphs shown below.



For items 56 and 57, factor.

56. $x^3 - 125$

57. $x^3 + 64$

For items 58 and 59, find all zeros of each function. Show how you determined the zeros.

58. $f(x) = 125x^3 - 8$

59. $g(x) = 64x^3 + 27$



60. Write a polynomial function with real coefficients in factored form if two of its complex zeros are 3 and $9i$.



61. Write a polynomial function with real coefficients in factored form if three of its complex zeros are 8 , $7i$, and $-5i$.



62. Determine if each expression below is a factor of $x^3 + 6x^2 - x - 30$. Write yes or no for each expression.

- a. $x - 2$ b. $x + 6$ c. $x - 5$
 d. $x + 2$ e. $x + 3$ f. $x + 5$



63. Divide. $(2x^3 - 9x^2 - 8x + 15) \div (x - 5)$

64. Given $f(x) = x^3 + 3x^2 - x - 3$

- a. Find the zeros of the function and sketch a graph.
 b. Complete: As $x \rightarrow \infty$, $f(x) \rightarrow$ ____
 c. Complete: As $x \rightarrow -\infty$, $f(x) \rightarrow$ ____



65. Let $f(x) = 4x^5 - 7x^3 + 5x^2 + 15$. Determine if each number below is a possible rational root (zero) according to the rational root theorem. Write yes or no for each number.

- a. 5 b. $-\frac{1}{4}$ c. $\frac{3}{2}$ d. 4 e. $\frac{1}{3}$



66. Using the rational root (zero) theorem, list the possible rational zeros of

$$f(x) = 5x^4 - 7x^2 + 4.$$



67. A fourth degree polynomial equation with real coefficients could have how many imaginary roots?

68. Let $f(x) = x^4 - x - 4$.



- a. How many zeros does $f(x)$ have?
 b. How many real number zeros does $f(x)$ have?

69. Let $f(x) = x^5 - 3x^2 - 4$.



a. How many zeros does $f(x)$ have?

A 0

B 1

C 4

D 5

b. How many real number zeros does $f(x)$ have?

A 0

B 1

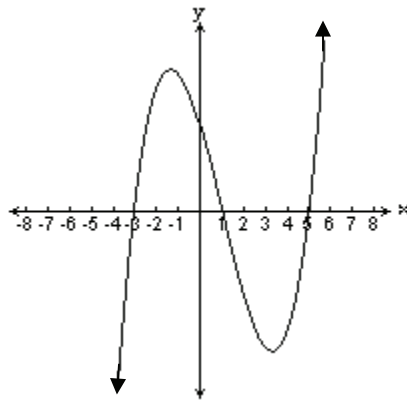
C 4

D 5

70. Solve the inequality. $x^4 - 5x^3 - 25x^2 + 65x + 84 \geq 0$.



71. Look at the graph of $f(x) = x^3 - 3x^2 - 13x + 15$ below.



Solve the inequality $x^3 - 3x^2 - 13x + 15 < 0$



72. The solutions of $x^3 - x^2 - 50x - 48 = 0$ are $x = -6, -1,$ and 8 .
- Write the polynomial $x^3 - x^2 - 50x - 48$ in factored form.
 - Solve the inequality $x^3 - x^2 - 50x - 48 \leq 0$ algebraically.



73. The solutions of $x^3 - 6x^2 - 19x + 84 = 0$ are $x = -4, 3,$ and 7 .
- Write the polynomial $x^3 - 6x^2 - 19x + 84$ in factored form.
 - Solve the inequality $x^3 - 6x^2 - 19x + 84 \geq 0$ algebraically.

74. Solve the inequality. $x(x - 6)(x + 2) > 0$

75. Complete the chart.

Function	Values of any local maximums	Values of any local minimums	Interval(s) where the function is increasing	Interval(s) where the function is decreasing
$f(x) = \frac{x^3}{3} + 2x^2 + x + 3$				
$g(x) = x^4 - 5x^2 + 4$				

76. Sam throws a ball up from the top of a building. The table below shows the height of the ball above the ground.

Time (sec) t	Height (ft) $f(t)$
0	400
1	434
2	436
3	406

- Write a polynomial function that best models the data.
- How high is the ball after 4 seconds?
- When does the ball hit the ground?

For items 77 and 78,



- Determine the degree of the polynomial that models the data.
- Use the regression feature of your calculator to write a function that models the data.

77.

x	1	2	3	4	5
$f(x)$	5	14	37	80	149

78.

x	0	1	2	3	4
$f(x)$	3	6	11	18	27